

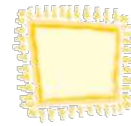


Chapter 13: How many

Question 1:

(Page 130)

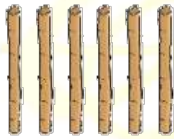
Write the number of sticks.



Answer:


In the picture given there are individual sticks that represent 6 ones.

Write 6 in the box given on the right side. The correct answer is:



Indian Education, International Approach

Question 2:



ORCHIDS
The International School


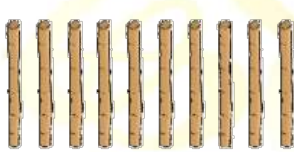


Answer:

In the picture given there are 8 individual sticks that represent 8 ones. Write 8 in the box given on the right side. The correct answer is:



Question 3:



Answer:

In the picture given there are 10 individual sticks and a bundle of 10 sticks. A bundle of 10 sticks represent 1 ten and 10 individual sticks also represent 1 ten. 2 tens represent the number 20. Write 20 in the box given on the right side. The correct answer is:





Question 4:




Answer:

In the picture given there is a bundle of 10 sticks and 3 individual sticks. A bundle of 10 sticks represent 1 ten and 3 individual sticks represents 3 ones. 1 ten and 3 ones represent the number 13. Write 13 in the box given on the right side. The correct answer is:




Question 5:





Answer:

In the picture given there is a bundle of 10 sticks and 5 individual sticks. A bundle of 10 sticks represent 1 ten and 5 individual sticks represent 5 ones. 1 ten and 5 ones represent the number 15. Write 15 in the box given on the right side. The correct answer is:



Question 6:




Answer:

In the picture given there is a bundle of 10 sticks and 7 individual sticks. A bundle of 10 sticks represent 1 ten and 7 individual sticks represent 7 ones. 1 ten and 7 ones represent the number 17. Write 17 in the box given on the right side. The correct answer is:






Question 7:



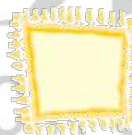
Answer:

In the picture given there is a bundle of 10 sticks and 6 individual sticks. A bundle of 10 sticks represent 1 ten and 6 individual sticks represent 6 ones. 1 ten and 6 ones represent the number 16. Write 16 in the box given on the right side. The correct answer is:



Question 8:

How many beads?



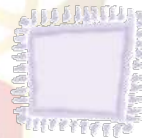
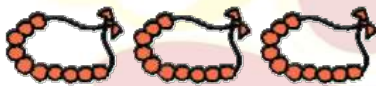


Answer:

In the picture given there are 3 necklaces of 10 beads and 2 individual beads. 3 necklaces of 10 beads represent 3 tens and 2 individual beads represent 2 ones. 3 tens and 2 ones represent the number 32. Write 32 in the box given on the right side. The correct answer is:



Question 9:



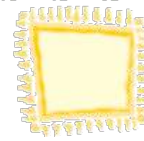
Answer:

In the picture given there are 3 necklaces of 10 beads and 9 individual beads. 3 necklaces of 10 beads represent 3 tens and 9 individual beads represent 9 ones. 3 tens and 9 ones represent the number 39. Write 39 in the box given on the right side. The correct answer is:





Question 10:




Answer:

In the picture given there are 4 necklaces of 10 beads and three individual beads. 4 necklaces of 10 beads represent 4 tens and three individual beads represent 3 ones. 4 tens and 3 ones represent the number 43. Write 43 in the box given on the right side. The correct answer is:



Question 11:

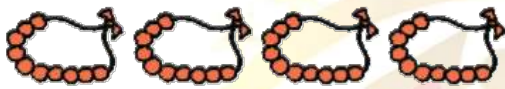


ORCHIDS
The International School

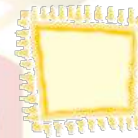
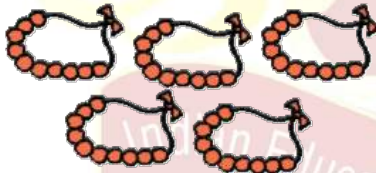


Answer:

In the picture given there are 4 necklaces of 10 beads and 5 individual beads. 4 necklaces of 10 beads represent 4 tens and 5 individual beads represent 5 ones. 4 tens and 5 ones represent the number 45. Write 45 in the box given on the right side. The correct answer is:

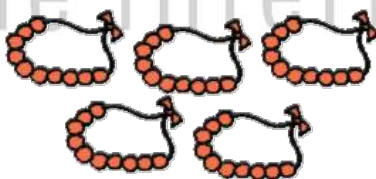


Question 12:



Answer:

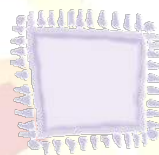
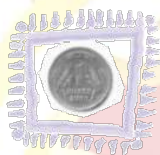
In the picture given there are 5 necklaces of 10 beads that represent 5 tens. 5 tens represent the number 50. Write 50 in the box given on the right side. The correct answer is:





Question 13:

How much will the bananas cost?




Answer:

Cost of one banana is Rs. 1. There are 3 bananas. If we add three 1-rupee coins, we will get Rs. 3 in total.

$$1 + 1 + 1 = 3$$

So, the cost of 3 bananas is Rs. 3 So, the correct answer is:





Question 14:

Give the number name.



Answer:

Write 15 in words. The correct answer is:



Fifteen

ORCHIDS
The International School

Question 15:

How many tens

**Answer:**

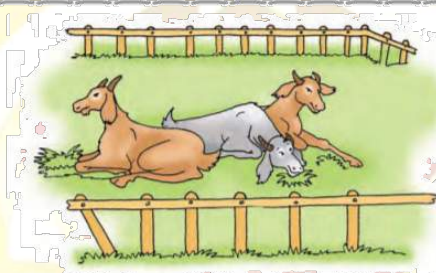

Two tens and four ones represent the number 24. So, there are 2 tens in 24. The correct answer is:





Question 16:

Develop a story based on the pictures and narrate it in the class.



ORCHIDS
The International School

Answer:

Look at the picture carefully. Create a story based on the pictures.

Answers can vary. A sample answer is:



Billu is very talented at making wooden baskets. Today he made 8 wooden baskets. Billu has 5 goats in total, there are 2 grey goats and 3 brown goats. 2 goats ran away, so now there are only 3 goats left.



ORCHIDS
The International School